
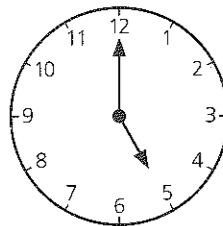


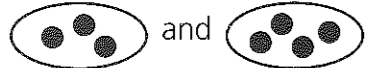
SECTION 1 | Test 1

Schofield & Sims




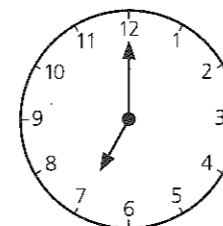
A Answer

- Count the sticks. How many?
 7
- $3 + 6 =$ 9
- $7 - 2 =$ 5
- $5p + 2p + 1p =$ 8p
- $9p - 6p =$ 3p
- $8 = 5 +$ 3
- $4 \times 1 =$ 4
- $5 = 9 -$ 4
- $2 + 2 + 2 + 2 =$ 8
-  What time is it? 5 o'clock

B Answer

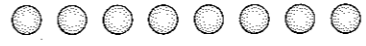
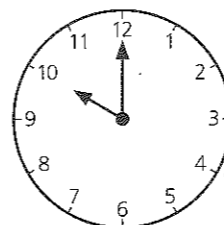
- Find the total number of dots.
 7
- Take 0 from 7. 7
- Write the word for the missing number.
3, 5, , 9 seven
- Four more than five 9
- How many must be taken from 5 to leave 3? 2
- To eight add zero. 8
- What number equals double 2? 4
- From 6 subtract 3. 3
- Find the difference between 3 and 8. 5
- Which of these numbers is an odd number?
2 4 5 6 8 5

C Answer

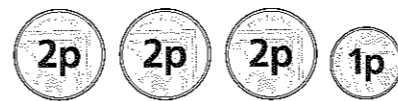
- Write the word for the number that comes between 6 and 8. seven
- Lucy has 7p and she spends 4p. How much has she left? 3p
- Which is the shortest line? A, B or C? B
A 
B 
C 
- Jack is 9 years old and Emily is 3 years younger. How old is Emily? 6
- By how much is 7p more than 3p? 4p
- Anu has one 5p and one 2p. How much are these coins worth altogether? 7p
- A line is 6cm long. By how many centimetres is it shorter than another line 8cm long? 2cm
- Gita has two 2ps and four 1ps. How much money has she altogether? 8p
- Which is the third letter in the row?
A B C D E F G C
-  Daniel gets to school 2 hours later than the time on this clock. At what time does he arrive? 9 o'clock

Mental Arithmetic 1 Answers

A Answer



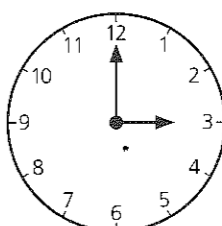
- How many beads? Write the number as a word. eight

- $2 + \square = 8$ 6
- $4p + 3p + 1p =$ 8p
- $9 - 5 =$ 4
- Which two numbers are missing?
2, , 4, 5, , 7, 8 3 and 6
- $\square - 3 = 2$ 5
-  What is the time? 10 o'clock
- $7 + 2 = 2 + \square$ 7
- $5 - 5 =$ 0
- $7p = 5p + \square p$ 2p

B Answer

- Write the missing even number.
2, 4, , 8 6
- Seven minus four 3
- Find the total of 3, 0 and 5. 8
- Take 8 from 8. 0
- How many days in one week? 7
- Find the total value of these coins.
 7p
- Write the number as a word that equals six plus three. nine
- Add 4p and 5p. 9p
- From 9 take 7. 2
- Subtract 0 from 6. 6

SECTION 1 | Test 2

C Answer

- Which is the longest line? A, B or C? A

- Ross spent 3p. He had a 5p left. How much had he at first? 8p
- How many days in a school week starting Monday and finishing Friday? 5
- On a necklace there are nine jewels. Three rubies, three sapphires and the rest are diamonds. How many diamonds are there? 3
- Jessica has these coins in her purse. She spends 4p. How much has she left? 5p

- Tom is 4 years older than Amy who is 4. How old is Tom? 8
-  This clock is 1 hour slow. What is the correct time? 4 o'clock
- The length of a line is 8cm. Find the length of a line which is 3cm shorter. 5cm
- Katie has 2p and Jakub has twice as much. How much have they altogether? 6p
- George has one 5p and two 1ps. How much more does he need to make 9p? 2p