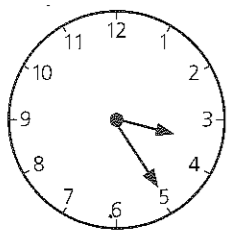
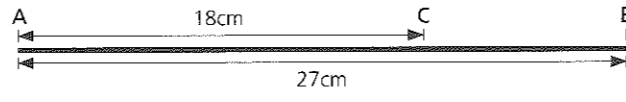


SECTION 2 | Test 11

Schofield & Sims

- | A | Answer |
|--|--------|
| 1 $300 + 20 + 7 =$ | 327 |
| 2 $(6 \times 3) + 2 =$ | 20 |
| 3 $24 \div \square = 4$ | 6 |
| 4 1m 9cm = \square cm | 109cm |
| 5 $\frac{1}{3}$ of 21p = | 7p |
| 6 209 = \square tens 9 units | 20 T |
| 7 Write as £s: two pounds 20 pence. | £2.20 |
| 8 $106 - 20 =$ | 86 |
| 9 $\frac{1}{2}$ hour + 15min = \square min | 45min |
| 10 $£1.00 - 16p =$ | 84p |

- | B | Answer |
|--|--------|
| 1 Complete this sequence.
407, 307, 207, 107, \square | 7 |
| 2 Find the total of 19, 7 and 5. | 31 |
| 3 How many centimetres in $2\frac{1}{2}$ m? | 250cm |
| 4  How many minutes to the next hour? | 35min |
| 5 By how much is 76p greater than 50p? | 26p |
| 6 $202 = (20 \times \square) + 2$ | 10 |
| 7 Add four to zero times five. | 4 |
| 8 What must be added to 86p to make £1.00? | 14p |
| 9 How many $\frac{1}{2}$ kg in 8kg? | 16 |
| 10 $68p =$ five 10ps + \square 2ps | 9 2ps |

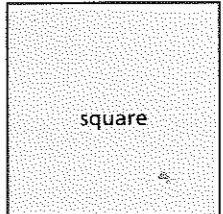
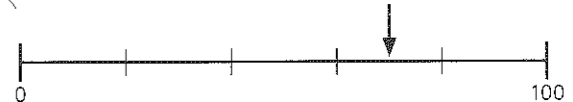
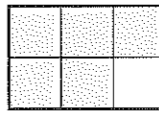
- | C | Answer |
|---|----------|
| 1 60 chairs are arranged in rows of 10. How many rows? _____ | 6 |
| 2 Kieran spent 10p and 8p. He had 5p left. How much had he at first? _____ | 23p |
| 3 If the line AB is 27cm long and the line AC is 18cm long, how long is CB? | 9cm |
|  | |
| 4 Which two of these sums of money when added together make 40p?
11p 12p 19p 28p | 12p 28p |
| 5 The difference between two numbers is 9. The smaller number is 18. What is the larger number? _____ | 27 |
| 6 $\frac{3}{4}$ of Chloe's money is 27p. What is $\frac{1}{4}$ of her money? _____ | 9p |
| 7 A shop closes from half past 12 p.m. until 2 p.m. For how many hours and minutes is the shop closed? _____ | 1h 30min |
| 8 Find the cost of 2kg of potatoes at 20p per $\frac{1}{2}$ kg. _____ | 80p |
| 9 What number when multiplied by 5 will give a product of 100? _____ | 20 |
| 10 A carton of milk costs 48p. Faye pays with an equal number of 5ps and 1ps. How many of each coin does she use? _____ | 8 |

Mental Arithmetic 1 Answers

- | A | Answer |
|--|--------|
| 1 Write in digits the number five hundred and seven. | 507 |
| 2 $194 + 8 =$ | 202 |
| 3 $\frac{1}{8}$ of 24p = | 3p |
| 4 $403\text{cm} = \square \text{ m } \square \text{ cm}$ | 4m 3cm |
| 5 $700 - 90 =$ | 610 |
| 6 $£1.54 = \square \text{ p}$ | 154p |
| 7 $(4 \times 8) + 5 =$ | 37 |
| 8 How many days in March? | 31 |
| 9 One 50p + three 10ps + two 2ps = | 84p |
| 10 $10 \times 10 \times 10 =$ | 1000 |

- | B | Answer |
|---|--------------------|
| 1 What number must be added to 52 to make 70? | 18 |
| 2 To £1.06 add 40p. | £1.46 |
| 3 From £1.58 take 16p. | £1.42 |
| 4 Increase $8\frac{1}{2}$ cm five times. | $42\frac{1}{2}$ cm |
| 5 Write < or > to make the statement true.
479 \square 481 | < |
| 6 How many quarters in $5\frac{1}{2}$? | 22 |
| 7 Complete this sequence.
94, 96, 98, 100, \square | 102 |
| 8 Name the month that is three months after November. | February |
| 9 How many hundreds in 1000? | 10 |
| 10 Share 36p equally among four friends. How much each? | 9p |

SECTION 2 | Test 12

- | C | Answer |
|--|-------------------|
| 1 Which two of these sums of money when added together make 50p?
13p 18p 27p 32p | 32p 18p |
| 2 How many times is the 5 in 51 greater than the 5 in 15? _____ | 10 |
| 3 A petrol tank, which holds 60l, is $\frac{3}{4}$ full. How many more litres will it take? _____ | 15l |
| 4  The total length of the four sides of the square is 38cm. Find the length of one side. _____ | $9\frac{1}{2}$ cm |
| 5 A TV programme starts at quarter to six and ends 35min later. Write in words the time it finishes. _____ | twenty past six |
| 6 What number is the arrow pointing to?
 | 70 |
| 7 Which of these amounts of money is nearest to £1.00?
£1.10 95p £0.98 £1.05 £0.98 | £0.98 |
| 8 Three numbers when added together total 639. One number is 9 and another is 600. Find the third. _____ | 30 |
| 9  What fraction of the shape is shaded? _____ | $\frac{5}{6}$ |
| 10 Five biscuits cost 25p. How much is paid for two biscuits? _____ | 10p |