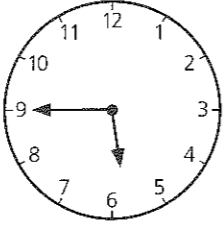



SECTION 2 | Test 7

Schofield & Sims

- | A | Answer |
|---|-----------------------|
| 1 $77 + 30 =$ | 107 |
| 2 Write in words the number 203. | two hundred and three |
| 3 $450 + 300 =$ | 750 |
| 4 $890 - 500 =$ | 390 |
| 5 $8 \overline{)24}$ | 3 |
| 6 $£1.25 = £1 +$ p pennies | 25 |
| 7 $23 -$ = 17 | 6 |
| 8 What comes next?
45, 85, 125, 165, | 205 |
| 9 $7 \times$ = 21 | 3 |
| 10 $40 + 6 = 30 +$ | 16 |

- | B | Answer |
|--|----------------|
| 1 Find the sum of £1.00 and 45p. | £1.45 |
| 2 How many centimetres in 5m? | 500cm |
| 3 Complete this sequence.
310, 210, 110, | 10 |
| 4 Take 40 from 200. | 160 |
| 5 Add the odd numbers between 16 and 20. | 36 |
| 6 How many hours from 11 a.m. to midnight? | 13h |
| 7 Find the change from £1 after spending 85p. | 15p |
| 8 How many times less than 300 is 30? | 10 |
| 9 What is the difference between a whole one and three-tenths? | $\frac{7}{10}$ |
| 10 $9 + 7 = 20 -$ | 4 |


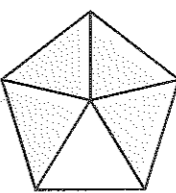




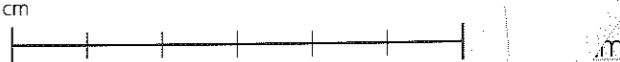
- | C | Answer |
|--|-------------------------------|
| 1 £1 is worth one 50p and some 5ps. How many 5ps? | 10 5ps |
| 2 What number is 10 more than 490? | 500 |
| 3 The lengths of four lines are $8\frac{1}{2}$ cm, $4\frac{1}{2}$ cm, 17cm, 24cm. Find the difference between the shortest and the longest lines. | $19\frac{1}{2}$ cm |
| 4  The time on this clock is 20 minutes slow. Write the correct time in words. | five past six |
| 5 48p is divided equally among six children. How much each? | 8p |
| 6 There are four glasses of juice in a litre. How many litres are needed to give 36 children a glass each? | 9l |
| 7 By how much is $\frac{1}{3}$ of 30p greater than $\frac{1}{5}$ of 30p? | 4p |
| 8 ● stands for a missing sign, +, -, × or ÷.
$8 \times 0 = 4 \bullet 4$
What is the correct sign? | - |
| 9 Sasmita buys two sweets at 7p each. How much change out of a 50p does she receive? | 36p |
| 10  Write in words the number shown on this abacus. | three hundred and forty-seven |

Mental Arithmetic 1 Answers

- | A | Answer |
|---------------------------|----------------|
| 1 $400 + 20 + 6 =$ | 426 |
| 2 $£0.72 =$ p | 72p |
| 3 $40 \div 8 =$ | 5 |
| 4 $5 \times 3 \times 0 =$ | 0 |
| 5 1m 38cm = cm | 138cm |
| 6 $97 - 50 =$ | 47 |
| 7 13 quarters = | $3\frac{1}{4}$ |
| 8 $4p +$ p = one 20p | 16p |
| 9 $100 - 20 =$ | 80 |
| 10 $18 \div 3 =$ | 6 |

- | B | Answer |
|--|--------|
| 1 How many tens are there in 380? | 38 |
| 2 What number is one more than 499? | 500 |
| 3 By how many centimetres is 1m 55cm longer than 1m? | 55cm |
| 4 How many 2ps are worth one 50p? | 25 2ps |
| 5 Share nine times 5p equally among five girls. How many pennies each? | 9p |
| 6 $£1.00 =$ 20ps | 5 20ps |
| 7 How many minutes from twenty to 12 until half past 12? | 50min |
| 8 $\frac{1}{2} =$ tenths | 15 |
| 9 What is the value of the 5 in the number 542? | 500 |
| 10 Write the next number in this sequence.
133, 123, 113, 103, | 93 |

SECTION 2 | Test 8

- | C | Answer |
|--|---------------|
| 1 What number is the arrow pointing to?
 | 30 |
| 2 Rearrange the digits 6, 9, 8 to make the largest possible number. | 986 |
| 3  What fraction of this shape is shaded? | $\frac{4}{5}$ |
| 4 Write as £s this sum of money. £3 and 27p. | £3.27 |
| 5 A piece of wood is 18cm shorter than 1m. How long is the piece of wood? | 82cm |
| 6 On a trip Ellie pays half fare, which is £8. How much is the total fare for Ellie and her mother? | £24 |
| 7 How many children chose red as their favourite colour?
red 
yellow 
blue 
one child =  | 3 |
| 8 Tom bought a toy for 68p. How much change did he receive from £1? | 32p |
| 9 $\frac{1}{3}$ of a sum of money is 12p. How much is $\frac{2}{3}$ of the money? | 24p |
| 10 Each centimetre on this line stands for 8m. What length in metres does the line stand for?
 | 48m |