
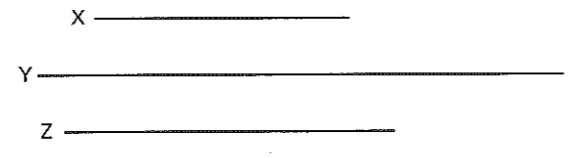


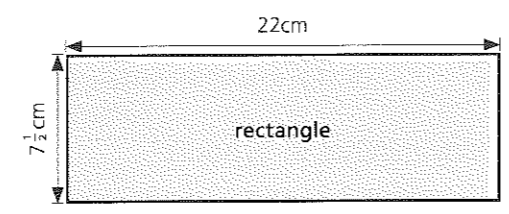
SECTION 2 | Test 5


Schofield & Sims

A	Answer
1 70 = <input type="checkbox"/> tens	7
2 Write in digits, three hundred.	300
3 $200 + 500 =$	700
4 $700 - 400 =$	300
5 $13p + 18p =$	31p
6 $\frac{1}{10}$ of 50p =	5p
7 $25p - 9p =$	16p
8 $(2 \times 8) + 5 =$	21
9 $7 = 28 \div$ <input type="checkbox"/>	4
10 $16 + 5 - 9 =$	12

B	Answer
1 Write the missing number in this sequence. 300, 400, 500, <input type="checkbox"/> , 700	600
2 Find the total of $30p + 6p + 4p + 10p$.	50p
3 What number is 11 more than 59?	70
4 How many centimetres in 3m?	300cm
5 How many hours from 10 a.m. to 2 p.m.?	4h
6  What fraction of this whole one is shaded?	$\frac{1}{3}$
7 By how much is 22p less than three 10ps?	8p
8 $8 + 8 + 8 + 8 + 8 + 8 + 8 =$ <input type="checkbox"/> $\times 8$	7×8 56
9 How many quarters in $2\frac{1}{2}$?	10
10 Find the difference between 30 and the sum of 19 and 7.	4

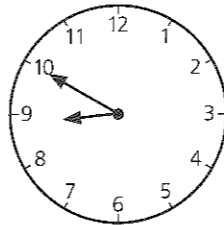
C	Answer
1 Estimate which of the lines X, Y or Z measures 7cm.	Y
	
2 £1.00 = 100p. How many pence are worth £5.00?	500p
3 What is the date four days after 29 December?	2 January
4 Of 35 cars, one-fifth are blue and the rest red. How many are red?	28
5 How many 6p stickers can be bought for two 20ps, one 10p and four 1ps?	9
6 By how many centimetres is the length of the rectangle longer than the width?	$14\frac{1}{2}$ cm



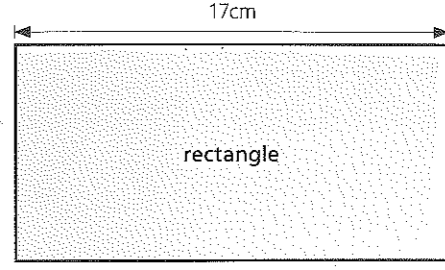
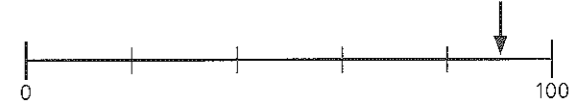
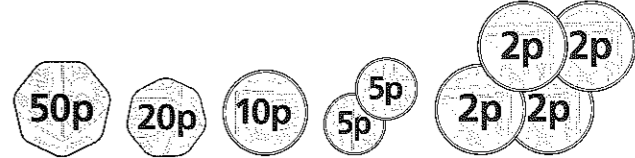
7 What number when divided by 3 gives 8 for the answer?	24
8 What fraction of these circles is white?	$\frac{1}{4}$ or $\frac{2}{8}$
	
9 How much is needed to give eight children 6p each?	48p
10 $\frac{1}{2}$ kg costs 14p. Find the cost of $1\frac{1}{2}$ kg.	42p

Mental Arithmetic 1 Answers

A	Answer
1 83p = <input type="checkbox"/> 10ps and <input type="checkbox"/> 1ps	8 10ps and 3 1ps
2 Write in digits, four hundred and eighty.	480
3 $250 + 100 =$	350
4 $720 - 100 =$	620
5 One-third of 27p =	9p
6 $21 - 5 - 7 =$	9
7 $30 - 3 = 40 -$ <input type="checkbox"/>	13
8 $10 \times 2 =$ <input type="checkbox"/> $\times 4$	5
9 Six 2ps + 3p = <input type="checkbox"/> 5ps	3 5ps
10 $48 \div 8 =$	6

B	Answer
1 What number is halfway between 50 and 100?	75
2 Write the missing number in this sequence. 490, 590, 690, <input type="checkbox"/> , 890	790
3 One-tenth of a line measures $5\frac{1}{2}$ cm. Find the total length.	55cm
4  Write in words the time that is 1h and 40min later.	half past ten (or ten thirty)
5 How many 10ps in £1.00?	10
6 Find the difference between $\frac{3}{4}$ and 2.	$1\frac{1}{4}$
7 How many metres is 600cm?	6m
8 Divide 27 into three equal parts. Find one part.	9
9 Find the total of 300, 150 and 500.	950
10 Multiply 8 by 5 and then add 3.	43

SECTION 2 | Test 6

C	Answer
1 A number minus 7 equals 19. What is the number?	26
2 By how many pence is £1.38 more than £1.00?	38p
3 The rectangle is twice as long as it is wide. Find the width.	$8\frac{1}{2}$ cm
	
4 Two notes together make £40. What are the notes?	£20 £20
5 What number is the arrow pointing to?	90
	
6 Ali has these coins. How much has he altogether?	98p
	
7 How many days are there from 28 May to 4 June? (Do not count 28 May.)	7
8 A bucket, when a quarter full, holds $3\frac{1}{2}$ l. How many litres will it hold when three-quarters full?	$10\frac{1}{2}$ l
9 Three breadsticks cost 12p. How much is paid for four breadsticks?	16p
10 Which of these lengths is nearest to 60cm? $\frac{1}{2}$ m, $62\frac{1}{2}$ cm, $58\frac{1}{2}$ cm, 66cm	$58\frac{1}{2}$ cm